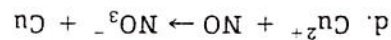
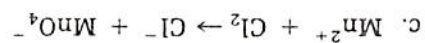
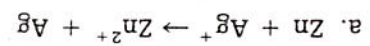


PROBLEMS

Name _____ Date _____ Class _____

Review Sections 26:7-26:11 of the text if you need help with these problems.

1. Write half-reactions for each of the following unbalanced reactions. Indicate which is the oxidation and reduction half-reaction.



2. Balance the following reactions by the redox half-reaction method.

